

Math Fluency Test (B)

Math Fluency Test (B) created by Julie Roy

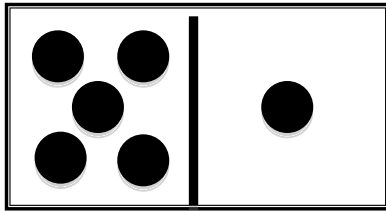
Ask: How many in total. Answers should be fairly automatic. If so, continue.

- A) 6
- B) 8
- C) 7
- D) 9

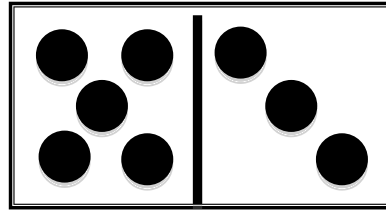
Counting 5 and a number

How many do you see?

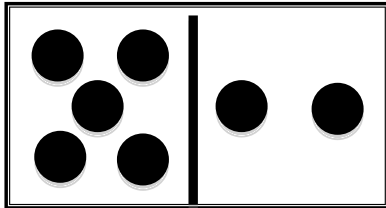
A)



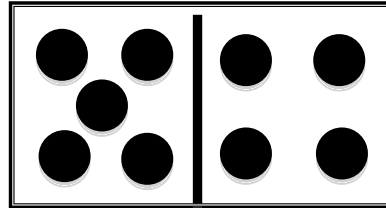
B)



C)



D)





Counting 5 and a number



What is the partner to 10 for each of the following numbers?

- A) 4
- B) 7
- C) 5
- D) 6
- E) 3
- F) 8

Partners to 10

What is the partner to 10 to each of the numbers?

A)  B) 3 C) 

D) 4 E)  F) 

Math Fluency Test (B) created by Julie Roy

Partners to 10

Show the page to the student. If correct answer is given, continue to next page.

2 more

A) 10 B) 8 C) 6

D) 12 E) 17 F) 11

2 less

A) 5 B) 1 C) 8

D) 7 E) 9 F) 3

Two more/Two less

What is 2 more than each number?

A) 8 B) 6 C) 4

D) 10 E) 15 F) 9

What is 2 less than each number?

A) 7 B) 3 C) 10

D) 9 E) 11 F) 5

Two more/ Two less

What is 1 more than each number?

A) 9 B) 4 C) 8

D) 10 E) 6 F) 3

What is 1 less than each number?

A) 8 B) 6 C) 11

D) 10 E) 5 F) 3

One more/One less

Ask student: What is one more than...

A) 10

B) 5

C) 9

D) 11

E) 7

F) 4

Ask student what is one less than...

A) 7

B) 5

C) 10

D) 9

E) 4

F) 2

1 more/one less